

Name \_\_\_\_\_

Date \_\_\_\_\_

# More than or less than?



Fill in the apples and numbers that make each sentence true.

is more than

is more than

is more than

is more than

Fill in the flowers and numbers that make each sentence true.

is less than

is less than

is less than

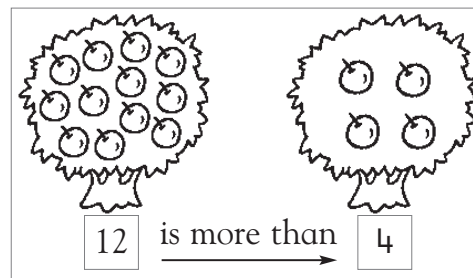
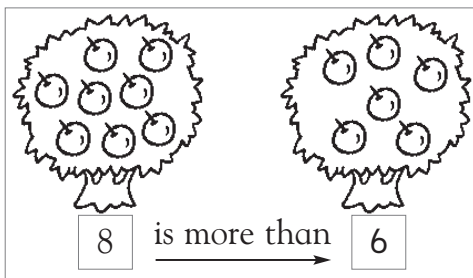
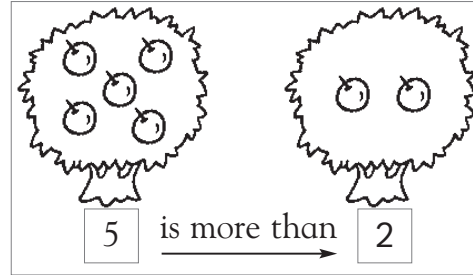
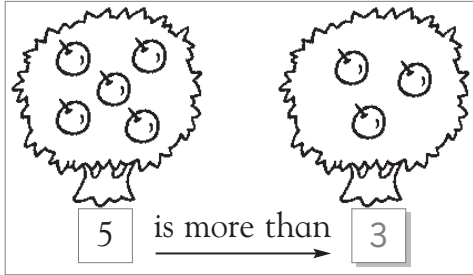
is less than

# Answer Key



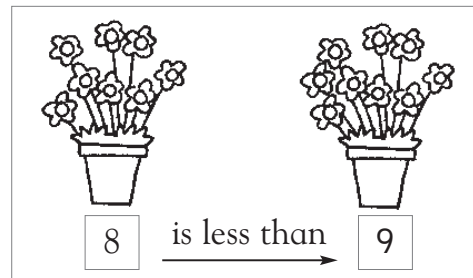

## More than or less than?



Fill in the apples and numbers that make each sentence true.



Fill in the flowers and numbers to make each sentence true.



Children's answers will vary. Make sure that the number of objects drawn matches the numeral written in the box and that the number sentence is valid.