
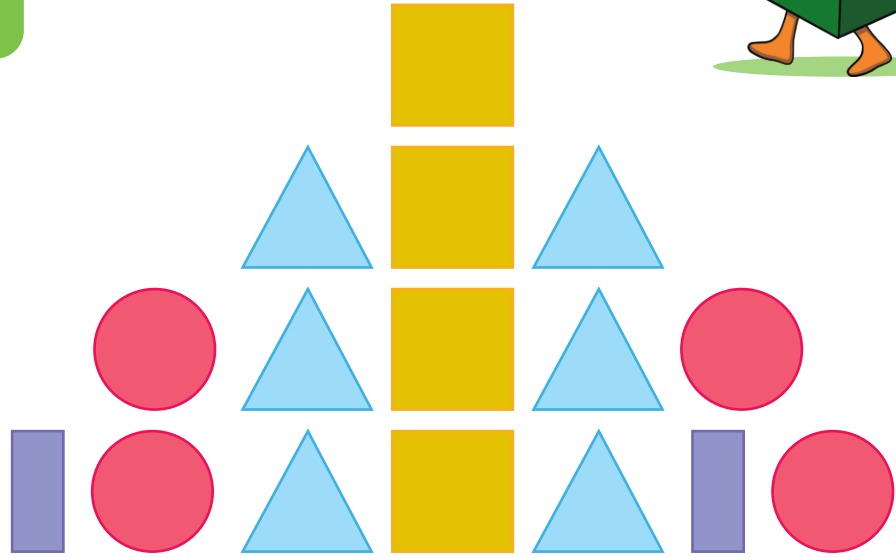



Pyramid Patterns



Look carefully at this pattern.



Discuss the following in class:

What elements are used in this pattern?

How many different elements are there?

Do the elements have more than one characteristic?

What are the characteristics? Colour, shape, size,

How many repeats are there?

Describe the pattern.

Is there a bug in this pattern? Yes/no

Describe the bug in this pattern.

Draw the pattern without the bug.

