

MATHS EXAM PRACTISE TEST 1

Intermediate Phase







Curated by



Practice test 1

Total: 25 marks

Count and write the number symbols and number names. (8)

	Number symbol	Number name
		
		
		
		

Do the following addition calculations.

(3)

$$8 + 6 = \underline{\quad}$$

$$12 + 5 = \underline{\quad}$$

$$9 + 7 = \underline{\quad}$$

Doubling:

(3)

3 is

5 is _____

7 is _____

A farmer has 4 cows, 2 sheep and 1 pig. How many animals does he have altogether? (3)

Build up the following - bonds (6)

$2 + \underline{\quad} = 5$

○ ○ ○ ○ ○

$1 + \underline{\quad} = 5$

○ ○ ○ ○ ○

$4 + \underline{\quad} = 6$

○ ○ ○ ○ ○ ○

$1 + \underline{\quad} = 6$

○ ○ ○ ○ ○ ○

$5 + \underline{\quad} = 7$

○ ○ ○ ○ ○ ○ ○

$3 + \underline{\quad} = 7$

○ ○ ○ ○ ○ ○ ○

Count backwards from 50 to 1

(2)

50			47			44		42	
	39			36					31
30		28					23		
			17		15			12	
	9			6		4			1