

# MATHS EXAM PRACTISE TEST 3

Intermediate Phase



Curated by



# Practice test 3

Total: 20 Marks

Count in fives.

(1)

5	10		20			35			50
---	----	--	----	--	--	----	--	--	----

Count backwards in tens.

(1)

100, 90, \_\_\_\_\_, \_\_\_\_\_, \_\_\_\_\_, 50, \_\_\_\_\_, \_\_\_\_\_, \_\_\_\_\_, \_\_\_\_\_, 0

Count in tens to 100.

(1)

10			40			70			100
----	--	--	----	--	--	----	--	--	-----

Halving:


(4)

4 is \_\_\_\_\_

8 is \_\_\_\_\_

12 is \_\_\_\_\_

16 is \_\_\_\_\_



There are four flowers. Each flowers has two leaves. How many leaves do they have altogether? (3)

---

---

Write the answers for the following.

(5)

two more than 16 is \_\_\_\_ .

two less than 12 is \_\_\_\_ .


18 is one more than \_\_\_\_.

16 is two more than \_\_\_\_ .

11 is two less than \_\_\_\_ .


Colour the block that has the most.

(1)



Colour the block that has less.

(1)



Before, between and after.

(3)

Which number comes before 17? \_\_\_\_

Which number comes after 32? \_\_\_\_

Which number is between 24 and 26? \_\_\_\_